

## St. Peter's Catholic Primary School



### Homework- Spring 2 Week 5



Please find below three English tasks and three Mathematics tasks for children to complete for their homework this week. Our recommendation is that children complete Task 1 for English and Maths on Tuesday, Task 2 for both on Wednesday and Task 3 for both on Thursday. This short, frequent style of homework will support children to consolidate their learning. Please find the answers on the class page. *The expectation is that children mark alongside parents/carers or self-mark.*

Children are to hand in their homework on Monday morning, alongside their reading record.

English			
	<u>Task 1:</u> Grammar and punctuation	<u>Task 2:</u> Reading comprehension	<u>Task 3:</u> Spelling Pattern
<p>Circle or underline the determiners in the sentences.</p> <ol style="list-style-type: none"> <li>1. Those earrings are beautiful!</li> <li>2. "Whose bone is that?" he thought.</li> <li>3. Our house was built in the 1900s.</li> <li>4. Many people have pets.</li> <li>5. The boy replied, "That book on the shelf."</li> <li>6. There were a few biscuits left in the tin.</li> <li>7. Determiner Dog sat in a garden waiting for the postman to arrive.</li> <li>8. A cat slowly walked along the fence.</li> <li>9. 'Get out of my garden!' thought Determiner Dog.</li> <li>10. Another cat appeared on the fence. Determiner Dog barked at the two cats to scare them away.</li> </ol>	<p>Fill the sentences with the appropriate determiner.</p> <ol style="list-style-type: none"> <li>1. _____ book do you want to read first?</li> <li>2. In Spain, _____ towns celebrate the festival of San José in March.</li> <li>3. _____ new classroom didn't have enough chairs.</li> <li>4. After sharing with her friends, Kacie only had a _____ sweets left.</li> <li>5. "_____ dad is really funny," said Jake to his friend Raj.</li> <li>6. "_____ dog is called Hugo," said Ken and Charlie.</li> <li>7. "Take _____ tickets and hand them in at the entrance," said the man at the ticket box.</li> </ol> <p>Write a sentence containing each of the determiners below.</p> <p>our: _____</p> <p>an: _____</p> <p>many: _____</p>	<p><u>See below</u></p>	<p><b>Word families based on common words, showing how words are related in form and meaning</b></p> <p style="text-align: center; color: #e91e63;">accommodate</p> <p style="text-align: center; color: #e91e63;">accompany</p> <p style="text-align: center;">access</p> <p style="text-align: center;">accuse</p> <p style="text-align: center;">accost</p> <p style="text-align: center;">accrue</p> <p style="text-align: center;">accuracy</p> <p style="text-align: center;">accomplish</p> <p style="text-align: center;">accumulate</p> <p style="text-align: center;">accentuate</p>



The two warriors stood side by side, their bodies exhausted from the long journey into the **Underworld**. Both had been brave and had won many battles in life. Death had been heroic - or so they hoped.

The men, still in their polished armour, knew it was judgement day. The oldest warrior hoped his soul would be fully rewarded by journeying to the Isles of the Blessed because it was his third **reincarnation**. It still thrilled him to see the sight of the three judges as he waited his turn. Aeacus was the guardian of the keys of Hades, Rhadamanthus was the lord of Elysium and Minos was the final decision-maker of where a soul should go.

Hopefully, the forked pathway would lead to the beautiful meadows of the Elysian Plains as a reward for a life of brave deeds. The youngest warrior was first to be judged by the touch of the golden rod and was honoured by journeying to the Elysian Plains.

Immediately, the young warrior was swept to Oceanus's west stream, riding the foamy waves of hope. Next, he washed away his sorrows in the River of Forgetfulness. Eventually, he reached a hidden entrance with an echoing silence. It opened onto fresh meadows and knotted, old trees. He had arrived.

The air was filled with many wonderful colours and sounds. The warrior could hear a flurry of wings, gentle singing and

the whisper of trees. The soothing wind bathed his aching muscles as he moved. Many flowers perfumed the air as they danced in the breeze.

The old warrior waited for his fate. Would he too be taken to the Elysian Plains? His heart's desire was to go to the Isles of the Blessed. The golden rods of the judges decided that he would get his wish.

Suddenly, the winding pathway took him into the soft, blue sky and he floated on fluffy clouds of dreams. As he neared the Isles of the Blessed, he glimpsed his first sight of the Gates of the Sun. The flames curled around the iron gates and beautiful voices sang as the gates beckoned him towards paradise.



Towering above the warrior stood a stunning, burnt-orange mountain. Many flowers bloomed but one was bright-yellow, like a flower of smiles. Falling from one side of the mountain was a stunning waterfall with a colourful rainbow made from the rapid water droplets.


At the bottom of the waterfall, many heroes were enjoying paradise. Large tables were filled with treats, such as sweet wines, creamy goat's cheese and honeyed meats. In the distance, great warriors stretched their muscles ready for racing across the many meadows.

The gods and goddesses relaxed at the top of the mountainside among dazzling, white pillars with the King of Elysium, Cronus, in the centre.

## Glossary

**reincarnation:** The belief that after somebody's death, their soul lives again in a new body.

**Underworld:** The place under the earth where people were believed to go when they died in Ancient Greek myths and legends.



St. Peter's Catholic Primary School



Homework- Spring 2 Week 5



1. Which **two** sounds could the first warrior hear on the Elysian Plains? Tick **two**.

- flames crackling
- the whisper of trees
- laughter
- flurry of wings

2. Number the facts from 1-4 to show the order they occur in the text.

- Many flowers perfumed the air as they danced in the breeze.
- At the bottom of the waterfall, many heroes were enjoying paradise.
- As he neared the Isles of the Blessed, he could see the first sight of the Gates of the Sun.
- Many flowers bloomed but one was bright-yellow, like a flower of smiles.

3. Underline one word in the quotation below that means 'twisting'.

*Suddenly, the winding pathway took him into the soft, blue sky and he floated on the fluffy clouds of dreams.*

4. Draw **four** lines and match each action to its location.

Falling from one side of the mountain was a stunning waterfall...

Elysian Plains

Next, he washed away his sorrows...

Gates of the Sun

The flames curled around the iron gates...

Isles of the Blessed

The soothing wind bathed his aching muscles as he moved.

River of Forgetfulness

5. Fill in the missing words.

In the distance, great \_\_\_\_\_ stretched their \_\_\_\_\_ ready for racing across the many meadows.

6. Why does the second warrior get the opportunity to go to the Isles of the Blessed?

\_\_\_\_\_

7. If you could choose to live in either the Elysian Plains or the Isles of the Blessed, which would you choose and why?

\_\_\_\_\_

\_\_\_\_\_

8. What impression do we get of Cronus? Explain your answer.

\_\_\_\_\_

\_\_\_\_\_



**Mathematics**

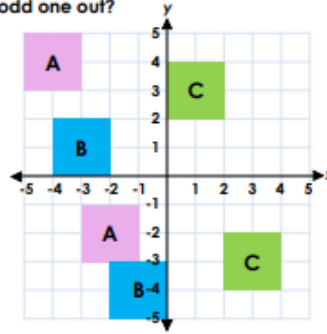
Task 1:  
Fluency

Task 2:  
Varied Fluency

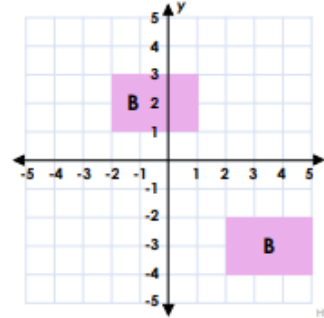
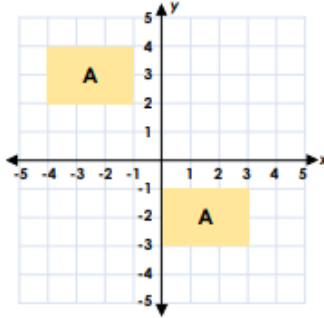
Task 3:  
Reasoning

27	40% of 1400 = <input type="text"/>
28	3% of 5000 = <input type="text"/>
29	$13 \times 0.4 =$ <input type="text"/>
30	40% of 237 = <input type="text"/>
31	$\frac{1}{10} \times \frac{1}{7} =$ <input type="text"/>
32	$4\frac{1}{2} - \frac{4}{5} =$ <input type="text"/>
33	$1440 \div 72 =$ <input type="text"/>
34	$6 - 3\frac{2}{7} =$ <input type="text"/>
35	$(8 + 3) \times 4 =$ <input type="text"/>
36	$3\frac{3}{4} \times 320 =$ <input type="text"/>

4. Which translation is the odd one out?



5. True or false? Shapes A and B have been translated using the same instructions.



6. Chris and Alana have been shown a translation.

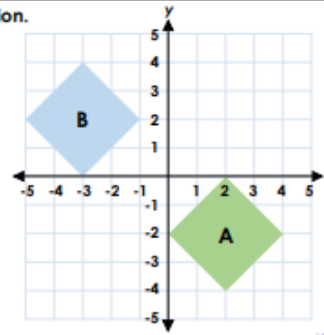


I think that shape A has been translated 5 squares left.



I think that shape A has been translated 5 squares left and 4 squares up.

Who do you agree with? Explain your answer.





1. Which **two** sounds could the first warrior hear on the Elysian Plains? Tick **two**.

- flames crackling
- the whisper of trees**
- laughter
- flurry of wings**

2. Number the facts from 1-4 to show the order they occur in the text.

- 1 Many flowers perfumed the air as they danced in the breeze.
- 4 At the bottom of the waterfall, many heroes were enjoying paradise.
- 2 As he neared the Isles of the Blessed, he could see the first sight of the Gates of the Sun.
- 3 Many flowers bloomed but one was bright-yellow, like a flower of smiles.

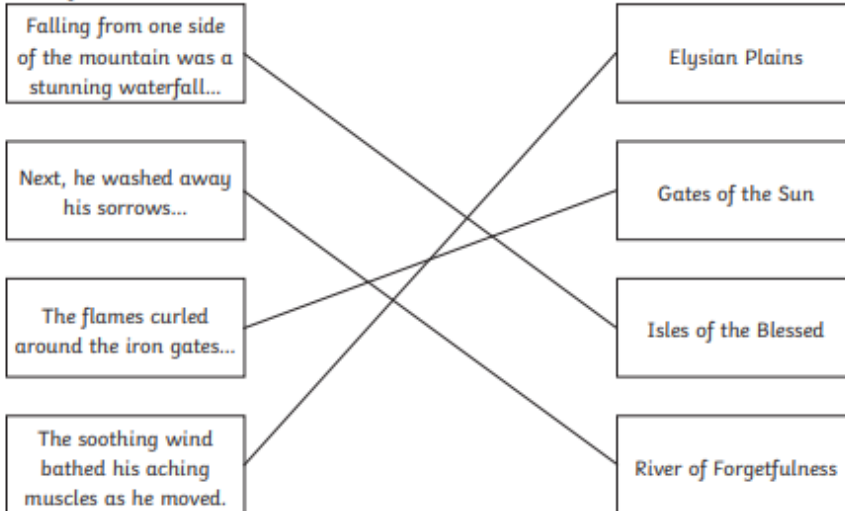
3. Underline one word in the quotation below that means 'twisting'.

Suddenly, the winding pathway took him into the soft, blue sky and he floated on the fluffy clouds of dreams.

**Award 1 mark for:**

- **winding**

4. Draw **four** lines and match each action to its location.



5. Fill in the missing words.

In the distance, great **warriors** stretched their **muscles** ready for racing across the many meadows.

6. Why does the second warrior get the opportunity to go to the Isles of the Blessed?

**Pupils' own responses, such as: The second warrior gets the chance to go to the Isles of the Blessed because he is in his third reincarnation.**

7. If you could choose to live in either the Elysian Plains or the Isles of the Blessed, which would you choose and why?

**Pupils' own responses, such as: I would live in the Isles of the Blessed because I could eat delicious foods and look at the beautiful waterfall with the bright yellow flower of smiles.**

8. What impression do we get of Cronus? Explain your answer.

**Pupils' own responses, such as: I get the impression that Cronus makes all the decisions and everyone is in awe of him because he sits at the top of the mountainside in the middle of the other gods and goddesses.**



27	$40\%$ of 1400 = <input type="text" value="560"/>
28	$3\%$ of 5000 = <input type="text" value="150"/>
29	$13 \times 0.4 =$ <input type="text" value="5.2"/>
30	$40\%$ of 237 = <input type="text" value="94.8"/>
31	$\frac{1}{10} \times \frac{1}{7} =$ <input type="text" value="1/70"/>
32	$4\frac{1}{2} - \frac{4}{5} =$ <input type="text" value="3 7/10"/>
33	$1440 \div 72 =$ <input type="text" value="20"/>
34	$6 - 3\frac{2}{7} =$ <input type="text" value="2 5/7"/>
35	$(8 + 3) \times 4 =$ <input type="text" value="44"/>
36	$3\frac{3}{4} \times 320 =$ <input type="text" value="1200"/>

4. B. It has been translated 5 down and 2 right. A and C have been translated 6 down and 2 right.

5. True

6. Alana is correct. Various possible answers, for example: I agree with Alana because Chris has moved the top of shape A to the bottom of shape B.